

Pure
Further Mathematics 1

Revision Notes

June 2016

Further Pure 1

- 1 Complex Numbers.....3
 - Definitions and arithmetical operations 3
 - Complex conjugate 3
 - Properties3
 - Complex number plane, or Argand diagram 4
 - Complex numbers and vectors.....4
 - Multiplication by i 5
 - Modulus of a complex number 5
 - Argument of a complex number 5
 - Equality of complex numbers 6
 - Square roots 6
 - Roots of equations 6
- 2 Numerical solutions of equations 8
 - Accuracy of solution 8
 - Interval bisection..... 8
 - Linear interpolation..... 9
 - Newton-Raphson 10
- 3 Coordinate systems 11
 - Parabolas 11
 - Parametric form 11
 - Focus and directrix..... 11
 - Gradient..... 11
 - Tangents and normals 12
 - Rectangular hyperbolas..... 12
 - Parametric form 13
 - Tangents and normals 13

4	Matrices	14
	Order of a matrix.....	14
	Identity matrix.....	14
	Determinant and inverse.....	14
	Singular and non-singular matrices	15
	Linear Transformations	15
	Basis vectors.....	15
	Finding the geometric effect of a matrix transformation	16
	Finding the matrix of a given transformation.....	16
	Rotation matrix.....	17
	Determinant and area factor	17
5	Series.....	18
6	Proof by induction	19
	Summation.....	19
	Recurrence relations	20
	Divisibility problems	20
	Powers of matrices.....	21
7	Appendix.....	22
	Complex roots of a real polynomial equation	22
	Formal definition of a linear transformation	22
	Derivative of x^n , for any integer	23
8	Index	24

1 Complex Numbers

Definitions and arithmetical operations

$i = \sqrt{-1}$, so $\sqrt{-16} = 4i$, $\sqrt{-11} = \sqrt{11}i$, etc.

These are called *imaginary* numbers

Complex numbers are written as $z = a + bi$, where a and $b \in \mathbb{R}$.
 a is the *real part* and b is the *imaginary part*.

$+$, $-$, \times are defined in the ‘sensible’ way; division is more complicated.

$$\begin{aligned}(a + bi) + (c + di) &= (a + c) + (b + d)i \\(a + bi) - (c + di) &= (a - c) + (b - d)i \\(a + bi) \times (c + di) &= ac + bdi^2 + adi + bci \\ &= (ac - bd) + (ad + bc)i\end{aligned}\quad \text{since } i^2 = -1$$

$$\begin{aligned}\text{So } (3 + 4i) - (7 - 3i) &= -4 + 7i \\ \text{and } (4 + 3i)(2 - 5i) &= 23 - 14i\end{aligned}$$

Division – this is just rationalising the denominator.

$$\begin{aligned}\frac{3+4i}{5+2i} &= \frac{3+4i}{5+2i} \times \frac{5-2i}{5-2i} && \text{multiply top and bottom by the complex conjugate} \\ &= \frac{23+14i}{25+4} = \frac{23}{29} + \frac{14}{29}i\end{aligned}$$

Complex conjugate

$$z = a + bi$$

The *complex conjugate* of z is $z^* = \bar{z} = a - bi$

Properties

If $z = a + bi$ and $w = c + di$, then

$$\begin{aligned}\text{(i) } \{(a + bi) + (c + di)\}^* &= \{(a + c) + (b + d)i\}^* \\ &= \{(a + c) - (b + d)i\} \\ &= (a - bi) + (c - di)\end{aligned}$$

$$\Leftrightarrow (z + w)^* = z^* + w^*$$

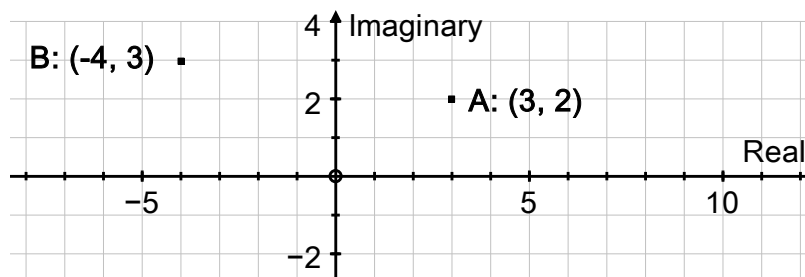
$$\begin{aligned}
\text{(ii)} \quad \{(a + bi)(c + di)\}^* &= \{(ac - bd) + (ad + bc)i\}^* \\
&= \{(ac - bd) - (ad + bc)i\} \\
&= (a - bi)(c - di) \\
&= (a + bi)^*(c + di)^*
\end{aligned}$$

$$\Leftrightarrow (zw)^* = z^* w^*$$

Complex number plane, or Argand diagram

We can represent complex numbers as points on the complex number plane:

$3 + 2i$ as the point $A(3, 2)$, and $-4 + 3i$ as the point $(-4, 3)$.



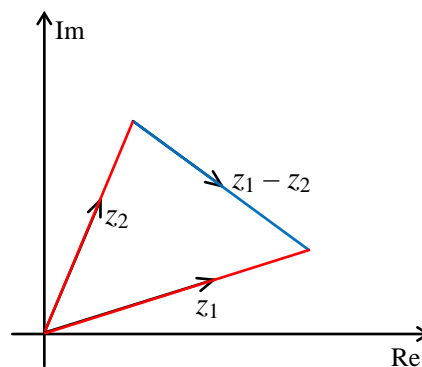
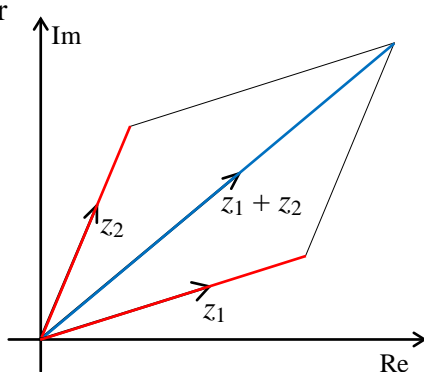
Complex numbers and vectors

Complex numbers under addition (or subtraction) behave just like vectors under addition (or subtraction). We can show complex numbers on the Argand diagram as **either** points **or** vectors.

$$(a + bi) + (c + di) = (a + c) + (b + d)i \quad \Leftrightarrow \quad \begin{pmatrix} a \\ b \end{pmatrix} + \begin{pmatrix} c \\ d \end{pmatrix} = \begin{pmatrix} a + c \\ b + d \end{pmatrix}$$

$$(a + bi) - (c + di) = (a - c) + (b - d)i \quad \Leftrightarrow \quad \begin{pmatrix} a \\ b \end{pmatrix} - \begin{pmatrix} c \\ d \end{pmatrix} = \begin{pmatrix} a - c \\ b - d \end{pmatrix}$$

or

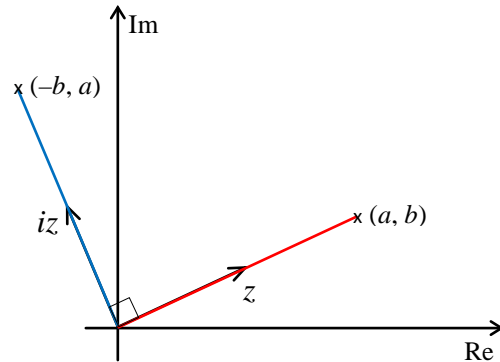


Multiplication by i

$i(3 + 4i) = -4 + 3i$ – on an Argand diagram this would have the effect of a positive quarter turn about the origin.

In general;

$$i(a + bi) = -b + ai$$



Modulus of a complex number

This is just like polar co-ordinates.

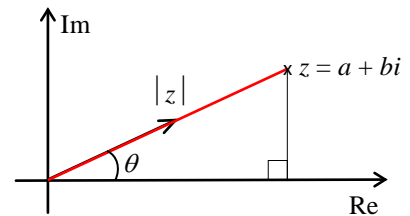
The modulus of z is $|z|$ and

is the length of the complex number

$$|z| = \sqrt{a^2 + b^2}.$$

$$z z^* = (a + bi)(a - bi) = a^2 + b^2$$

$$\Rightarrow z z^* = |z|^2.$$



Argument of a complex number

The argument of z is $\arg z =$ the angle made by the complex number with the positive x -axis.

By convention, $-\pi < \arg z \leq \pi$.

N.B. Always draw a diagram when finding $\arg z$.

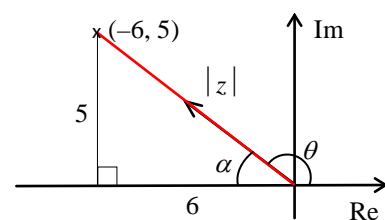
Example: Find the modulus and argument of $z = -6 + 5i$.

Solution: First sketch a diagram (it is easy to get the argument wrong if you don't).

$$|z| = \sqrt{6^2 + 5^2} = \sqrt{61}$$

$$\text{and } \tan \alpha = \frac{5}{6} \Rightarrow \alpha = 0.694738276$$

$$\Rightarrow \arg z = \theta = \pi - \alpha = 2.45 \quad \text{to 3 S.F.}$$



Equality of complex numbers

$$a + bi = c + di \quad \Rightarrow \quad a - c = (d - b)i$$

$$\Rightarrow (a - c)^2 = (d - b)^2 i^2 = -(d - b)^2 \quad \text{squaring both sides}$$

$$\text{But } (a - c)^2 \geq 0 \quad \text{and} \quad -(d - b)^2 \leq 0$$

$$\Rightarrow (a - c)^2 = -(d - b)^2 = 0$$

$$\Rightarrow a = c \quad \text{and} \quad b = d$$

$$\text{Thus } a + bi = c + di$$

$$\Rightarrow \text{real parts are equal } (a = c), \text{ and imaginary parts are equal } (b = d).$$

Square roots

Example: Find the square roots of $5 + 12i$, in the form $a + bi$, $a, b \in \mathbb{R}$.

Solution: Let $\sqrt{5 + 12i} = a + bi$

$$\Rightarrow 5 + 12i = (a + bi)^2 = a^2 - b^2 + 2abi$$

$$\text{Equating real parts} \quad \Rightarrow \quad a^2 - b^2 = 5, \quad \mathbf{I}$$

$$\text{equating imaginary parts} \quad \Rightarrow \quad 2ab = 12 \quad \Rightarrow \quad a = \frac{6}{b}$$

$$\text{Substitute in } \mathbf{I} \quad \Rightarrow \quad \left(\frac{6}{b}\right)^2 - b^2 = 5$$

$$\Rightarrow 36 - b^4 = 5b^2 \quad \Rightarrow \quad b^4 + 5b^2 - 36 = 0$$

$$\Rightarrow (b^2 - 4)(b^2 + 9) = 0 \quad \Rightarrow \quad b^2 = 4$$

$$\Rightarrow b = \pm 2, \text{ and } a = \pm 3$$

$$\Rightarrow \sqrt{5 + 12i} = 3 + 2i \quad \text{or} \quad -3 - 2i.$$

Roots of equations

(a) **Any** polynomial equation with complex coefficients has a complex solution.

This is *The Fundamental Theorem of Algebra*, and is too difficult to prove at this stage.

Corollary: Any complex polynomial can be factorised into linear factors over the complex numbers.

- (b) **If** $z = a + bi$ is a root of $\alpha_n z^n + \alpha_{n-1} z^{n-1} + \alpha_{n-2} z^{n-2} + \dots + \alpha_2 z^2 + \alpha_1 z + \alpha_0 = 0$,
and if all the α_i are **real**,
 then the conjugate, $z^* = a - bi$ is also a root.

The proof of this result is in the appendix.

- (c) For any polynomial with zeros $a + bi$, $a - bi$,
 $(z - (a + bi))(z - (a - bi)) = z^2 - 2az + a^2 - b^2$ will be a quadratic factor in which the coefficients are all **real**.
- (d) Using (a), (b), (c) we can see that any polynomial with **real** coefficients can be factorised into a mixture of linear and quadratic factors, all of which have **real** coefficients.

Example: Show that $3 - 2i$ is a root of the equation $z^3 - 8z^2 + 25z - 26 = 0$.
 Find the other two roots.

Solution: Put $z = 3 - 2i$ in $z^3 - 8z^2 + 25z - 26$

$$= (3 - 2i)^3 - 8(3 - 2i)^2 + 25(3 - 2i) - 26$$

$$= 27 - 54i + 36i^2 - 8i^3 - 8(9 - 12i + 4i^2) + 75 - 50i - 26$$

$$= 27 - 54i - 36 + 8i - 72 + 96i + 32 + 75 - 50i - 26$$

$$= 27 - 36 - 72 + 32 + 75 - 26 + (-54 + 8 + 96 - 50)i$$

$$= 0 + 0i$$

$\Rightarrow 3 - 2i$ is a root

\Rightarrow the conjugate, $3 + 2i$, is also a root since all coefficients are **real**

$\Rightarrow (z - (3 + 2i))(z - (3 - 2i)) = z^2 - 6z + 13$ is a factor.

Factorising, by inspection,

$$z^3 - 8z^2 + 25z - 26 = (z^2 - 6z + 13)(z - 2) = 0$$

\Rightarrow roots are $z = 3 \pm 2i$, or 2

2 Numerical solutions of equations

Accuracy of solution

When asked to show that a solution is accurate to n D.P., you must look at the value of $f(x)$ 'half' below and 'half' above, and conclude that

there is a **change of sign** in the **interval**, and the function is **continuous**, therefore there is a **solution in the interval correct to n D.P.**

Example: Show that $\alpha = 2.0946$ is a root of the equation
 $f(x) = x^3 - 2x - 5 = 0$, accurate to 4 D.P.

Solution:

$$f(2.09455) = -0.0000165\dots, \text{ and } f(2.09465) = +0.00997$$

There is a **change of sign** and f is **continuous**

\Rightarrow there is a **root** in **[2.09455, 2.09465]** \Rightarrow **root is $\alpha = 2.0946$ to 4 D.P.**

Interval bisection

(i) Find an interval $[a, b]$ which contains the root of an equation $f(x) = 0$.

(ii) $x = \frac{a+b}{2}$ is the mid-point of the interval $[a, b]$

Find $f\left(\frac{a+b}{2}\right)$ to decide whether the root lies in $\left[a, \frac{a+b}{2}\right]$ or $\left[\frac{a+b}{2}, b\right]$.

(iii) Continue finding the mid-point of each subsequent interval to narrow the interval which contains the root.

Example: (i) Show that there is a root of the equation
 $f(x) = x^3 - 2x - 7 = 0$ in the interval $[2, 3]$.
(ii) Find an interval of width 0.25 which contains the root.

Solution: (i) $f(2) = 8 - 4 - 7 = -3$, and $f(3) = 27 - 6 - 7 = 14$

There is a **change of sign** and f is **continuous** \Rightarrow there is a root in $[2, 3]$.

(ii) Mid-point of $[2, 3]$ is $x = 2.5$, and $f(2.5) = 15.625 - 5 - 7 = 3.625$

\Rightarrow change of sign between $x = 2$ and $x = 2.5$

\Rightarrow root in $[2, 2.5]$

Mid-point of $[2, 2.5]$ is $x = 2.25$,
 and $f(2.25) = 11.390625 - 4.5 - 7 = -0.109375$

\Rightarrow change of sign between $x = 2.25$ and $x = 2.5$

\Rightarrow root in $[2.25, 2.5]$, which is an interval of width 0.25

Linear interpolation

To solve an equation $f(x)$ using linear interpolation.

First, find an interval which contains a root,

second, assume that the curve is a straight line and use similar triangles to find where the line crosses the x -axis,

third, repeat the process as often as necessary.

Example: (i) Show that there is a root, α , of the equation

$$f(x) = x^3 - 2x - 9 = 0 \text{ in the interval } [2, 3].$$

(ii) Use linear interpolation once to find an approximate value of α .
 Give your answer to 3 D.P.

Solution: (i) $f(2) = 8 - 4 - 9 = -5$, and $f(3) = 27 - 6 - 9 = 12$

There is a **change of sign** and f is **continuous** \Rightarrow there is a root in $[2, 3]$.

(ii) From (i), curve passes through $(2, -5)$ and $(3, 12)$, and we assume that the curve is a straight line between these two points.

Let the line cross the x -axis at $(\alpha, 0)$

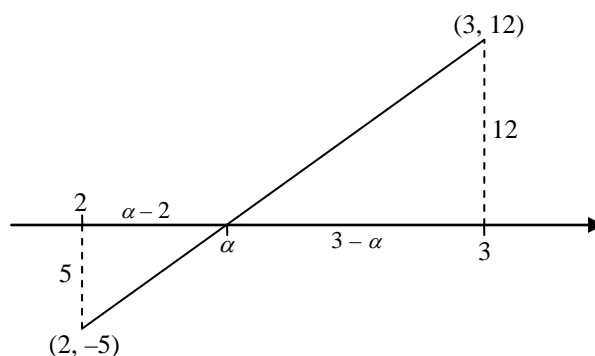
Using similar triangles

$$\frac{3-\alpha}{\alpha-2} = \frac{12}{5}$$

$$\Rightarrow 15 - 5\alpha = 12\alpha - 24$$

$$\Rightarrow \alpha = \frac{39}{17} = 2\frac{5}{17}$$

$$\Rightarrow \alpha = 2.294 \text{ to 3 D.P.}$$



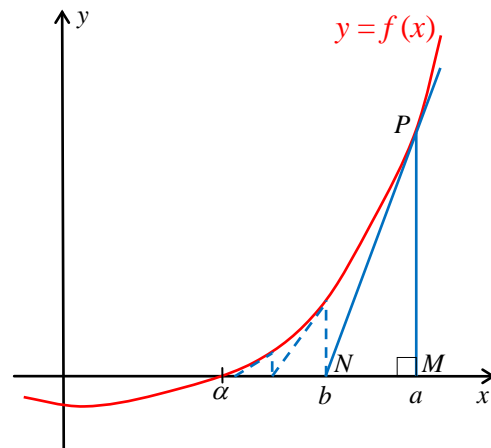
Repeating the process will improve accuracy.

Newton-Raphson

Suppose that the equation $f(x) = 0$ has a root at $x = \alpha$, $\Rightarrow f(\alpha) = 0$

To find an approximation for this root, we first find a value $x = a$ near to $x = \alpha$ (decimal search).

In general, the point where the tangent at P , $x = a$, meets the x -axis, $x = b$, will give a better approximation.



At P , $x = a$, the gradient of the tangent is $f'(a)$,

and the gradient of the tangent is also $\frac{PM}{NM}$.

$$PM = y = f(a) \text{ and } NM = a - b$$

$$\Rightarrow f'(a) = \frac{PM}{NM} = \frac{f(a)}{a-b} \Rightarrow b = a - \frac{f(a)}{f'(a)}$$

Further approximations can be found by repeating the process, which would follow the dotted line converging to the point $(\alpha, 0)$.

This formula can be written as the iteration $x_{n+1} = x_n - \frac{f(x_n)}{f'(x_n)}$

Example: (i) Show that there is a root, α , of the equation $f(x) = x^3 - 2x - 5 = 0$ in the interval $[2, 3]$.

(ii) Starting with $x_0 = 2$, use the Newton-Raphson formula to find x_1 , x_2 and x_3 , giving your answers to 3 D.P. where appropriate.

Solution: (i) $f(2) = 8 - 4 - 5 = -1$, and $f(3) = 27 - 6 - 5 = 16$

There is a **change of sign** and f is **continuous** \Rightarrow there is a root in $[2, 3]$.

$$(ii) f(x) = x^3 - 2x - 5 \Rightarrow f'(x) = 3x^2 - 2$$

$$\Rightarrow x_1 = x_0 - \frac{f(x_0)}{f'(x_0)} = 2 - \frac{8-4-5}{12-2} = 2.1$$

$$\Rightarrow x_2 = 2.094568121 = 2.095$$

$$\Rightarrow x_3 = 2.094551482 = 2.095$$

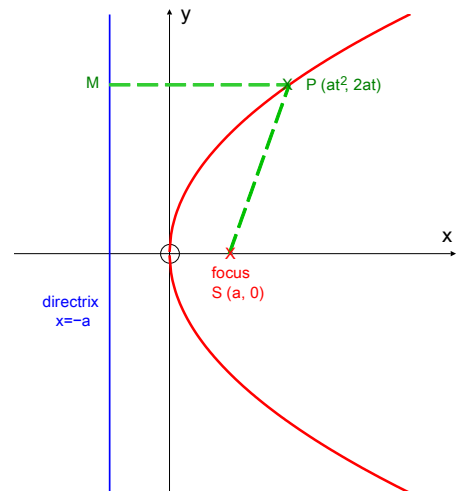
3 Coordinate systems

Parabolas

$y^2 = 4ax$ is the equation of a parabola which passes through the origin and has the x -axis as an axis of symmetry.

Parametric form

$x = at^2$, $y = 2at$ satisfy the equation for all values of t . t is a parameter, and these equations are the parametric equations of the parabola $y^2 = 4ax$.



Focus and directrix

The point $S(a, 0)$ is the *focus*, and

the line $x = -a$ is the *directrix*.

Any point P of the curve is equidistant from the focus and the directrix, $PM = PS$.

$$\begin{aligned} \text{Proof: } PM &= at^2 - (-a) = at^2 + a \\ PS^2 &= (at^2 - a)^2 + (2at)^2 = a^2t^4 - 2a^2t^2 + a^2 + 4a^2t^2 \\ &= a^2t^4 + 2a^2t^2 + a^2 = (at^2 + a)^2 = PM^2 \\ \Rightarrow PM &= PS. \end{aligned}$$

Gradient

For the parabola $y^2 = 4ax$, with general point $P, (at^2, 2at)$, we can find the gradient in two ways:

1. $y^2 = 4ax$
 $\Rightarrow 2y \frac{dy}{dx} = 4a \Rightarrow \frac{dy}{dx} = \frac{2a}{y}$, which we can write as $\frac{dy}{dx} = \frac{2a}{2at} = \frac{1}{t}$
2. At $P, x = at^2, y = 2at$
 $\Rightarrow \frac{dy}{dt} = 2a, \frac{dx}{dt} = 2at$
 $\Rightarrow \frac{dy}{dx} = \frac{dy/dt}{dx/dt} = \frac{2a}{2at} = \frac{1}{t}$

Tangents and normals

Example: Find the equations of the tangents to $y^2 = 8x$ at the points where $x = 18$, and show that the tangents meet on the x -axis.

Solution: $x = 18 \Rightarrow y^2 = 8 \times 18 \Rightarrow y = \pm 12$

$$2y \frac{dy}{dx} = 8 \Rightarrow \frac{dy}{dx} = \pm \frac{1}{3} \quad \text{since } y = \pm 12$$

$$\Rightarrow \text{tangents are } y - 12 = \frac{1}{3}(x - 18) \Rightarrow x - 3y + 18 = 0 \quad \text{at } (18, 12)$$

$$\text{and } y + 12 = -\frac{1}{3}(x - 18) \Rightarrow x + 3y + 18 = 0. \quad \text{at } (18, -12)$$

To find the intersection, add the equations to give

$$2x + 36 = 0 \Rightarrow x = -18 \Rightarrow y = 0$$

\Rightarrow tangents meet at $(-18, 0)$ on the x -axis.

Example: Find the equation of the normal to the parabola given by $x = 3t^2$, $y = 6t$.

Solution: $x = 3t^2$, $y = 6t \Rightarrow \frac{dx}{dt} = 6t$, $\frac{dy}{dt} = 6$,

$$\Rightarrow \frac{dy}{dx} = \frac{dy/dt}{dx/dt} = \frac{6}{6t} = \frac{1}{t}$$

$$\Rightarrow \text{gradient of the normal is } \frac{-1}{\frac{1}{t}} = -t$$

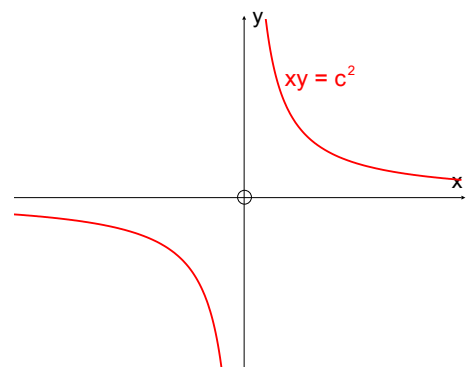
$$\Rightarrow \text{equation of the normal is } y - 6t = -t(x - 3t^2).$$

Notice that this 'general equation' gives the equation of the normal for any particular value of t :— when $t = -3$ the normal is $y + 18 = 3(x - 27) \Leftrightarrow y = 3x - 99$.

Rectangular hyperbolas

A *rectangular* hyperbola is a hyperbola in which the asymptotes meet at 90° .

$xy = c^2$ is the equation of a rectangular hyperbola in which the x -axis and y -axis are perpendicular asymptotes.



Parametric form

$x = ct$, $y = \frac{c}{t}$ are parametric equations of the hyperbola $xy = c^2$.

Tangents and normals

Example: Find the equation of the tangent to the hyperbola $xy = 36$ at the point where $x = 3$.

Solution: $x = 3 \Rightarrow 3y = 36 \Rightarrow y = 12$

$$y = \frac{36}{x} \Rightarrow \frac{dy}{dx} = -\frac{36}{x^2} = -4 \quad \text{when } x = 3$$

$$\Rightarrow \text{tangent is } y - 12 = -4(x - 3) \Rightarrow 4x + y - 24 = 0.$$

Example: Find the equation of the normal to the hyperbola given by $x = 3t$, $y = \frac{3}{t}$.

Solution: $x = 3t$, $y = \frac{3}{t} \Rightarrow \frac{dx}{dt} = 3$, $\frac{dy}{dt} = \frac{-3}{t^2}$

$$\Rightarrow \frac{dy}{dx} = \frac{dy/dt}{dx/dt} = \frac{-3/t^2}{3} = \frac{-1}{t^2}$$

$$\Rightarrow \text{gradient of the normal is } \frac{-1}{\frac{-1}{t^2}} = t^2$$

$$\Rightarrow \text{equation of the normal is } y - \frac{3}{t} = t^2(x - 3t)$$

$$\Rightarrow t^3x - ty = 3t^4 - 3.$$

4 Matrices

You must be able to add, subtract and multiply matrices.

Order of a matrix

An $r \times c$ matrix has r rows and c columns;

the first number is the number of Rows

the second number is the number of Columns.

Identity matrix

The identity matrix is $I = \begin{pmatrix} 1 & 0 \\ 0 & 1 \end{pmatrix}$.

Note that $MI = IM = M$ for any matrix M .

Determinant and inverse

Let $M = \begin{pmatrix} a & b \\ c & d \end{pmatrix}$ then the *determinant* of M is

$$\text{Det } M = |M| = ad - bc.$$

To find the *inverse* of $M = \begin{pmatrix} a & b \\ c & d \end{pmatrix}$

$$\text{Note that } M^{-1}M = MM^{-1} = I$$

- (i) Find the determinant, $ad - bc$.
If $ad - bc = 0$, there is no inverse.
- (ii) Interchange a and d (the leading diagonal)
Change sign of b and c , (the other diagonal)
Divide all elements by the determinant, $ad - bc$.

$$\Rightarrow M^{-1} = \frac{1}{ad-bc} \begin{pmatrix} d & -b \\ -c & a \end{pmatrix}.$$

Check:

$$M^{-1}M = \frac{1}{ad-bc} \begin{pmatrix} d & -b \\ -c & a \end{pmatrix} \begin{pmatrix} a & b \\ c & d \end{pmatrix} = \frac{1}{ad-bc} \begin{pmatrix} da - bc & 0 \\ 0 & -cb + ad \end{pmatrix} = \begin{pmatrix} 1 & 0 \\ 0 & 1 \end{pmatrix} = I$$

Similarly we could show that $MM^{-1} = I$.

Example: $M = \begin{pmatrix} 4 & 2 \\ 5 & 3 \end{pmatrix}$ and $MN = \begin{pmatrix} -1 & 2 \\ 2 & 1 \end{pmatrix}$. Find N .

Solution: Notice that $M^{-1}(MN) = (M^{-1}M)N = IN = N$ multiplying on the **left** by M^{-1}

But $MNM^{-1} \neq IN$ we cannot multiply on the **right** by M^{-1}

First find M^{-1}

$$\text{Det } M = 4 \times 3 - 2 \times 5 = 2 \Rightarrow M^{-1} = \frac{1}{2} \begin{pmatrix} 3 & -2 \\ -5 & 4 \end{pmatrix}$$

Using $M^{-1}(MN) = IN = N$

$$\Rightarrow N = \frac{1}{2} \begin{pmatrix} 3 & -2 \\ -5 & 4 \end{pmatrix} \begin{pmatrix} -1 & 2 \\ 2 & 1 \end{pmatrix} = \frac{1}{2} \begin{pmatrix} -7 & 4 \\ 13 & -6 \end{pmatrix} = \begin{pmatrix} -3.5 & 2 \\ 6.5 & -3 \end{pmatrix}.$$

Singular and non-singular matrices

If $\det A = 0$, then A is a *singular matrix*, and A^{-1} does not exist.

If $\det A \neq 0$, then A is a *non-singular matrix*, and A^{-1} exists

Linear Transformations

A matrix can represent a transformation, but the point must be written as a column vector before multiplying by the matrix.

Example: The image of $(2, 3)$ under $T = \begin{pmatrix} 4 & 5 \\ 1 & 2 \end{pmatrix}$ is given by $\begin{pmatrix} 4 & 5 \\ 1 & 2 \end{pmatrix} \begin{pmatrix} 2 \\ 3 \end{pmatrix} = \begin{pmatrix} 23 \\ 8 \end{pmatrix}$

\Rightarrow the image of $(2, 3)$ is $(23, 8)$.

Note that the image of $(0, 0)$ is always $(0, 0)$

\Leftrightarrow the **origin never moves** under a matrix (linear) transformation

Basis vectors

The vectors $\underline{i} = \begin{pmatrix} 1 \\ 0 \end{pmatrix}$ and $\underline{j} = \begin{pmatrix} 0 \\ 1 \end{pmatrix}$ are called *basis* vectors, and are particularly important in describing the geometrical effect of a matrix, and in finding the matrix for a particular geometric transformation.

$$\begin{pmatrix} a & b \\ c & d \end{pmatrix} \begin{pmatrix} 1 \\ 0 \end{pmatrix} = \begin{pmatrix} a \\ c \end{pmatrix} \quad \text{and} \quad \begin{pmatrix} a & b \\ c & d \end{pmatrix} \begin{pmatrix} 0 \\ 1 \end{pmatrix} = \begin{pmatrix} b \\ d \end{pmatrix}$$

$\underline{i} = \begin{pmatrix} 1 \\ 0 \end{pmatrix} \rightarrow \begin{pmatrix} a \\ c \end{pmatrix}$, the *first* column, and $\underline{j} = \begin{pmatrix} 0 \\ 1 \end{pmatrix} \rightarrow \begin{pmatrix} b \\ d \end{pmatrix}$, the *second* column

This is a more important result than it seems!

Finding the geometric effect of a matrix transformation

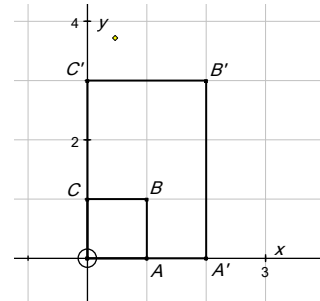
We can easily write down the images of \underline{i} and \underline{j} , sketch them and find the geometrical transformation.

Example: Find the transformation represented by the matrix $T = \begin{pmatrix} 2 & 0 \\ 0 & 3 \end{pmatrix}$

Solution: Find images of $\underline{i}, \underline{j}$ and $\begin{pmatrix} 1 \\ 1 \end{pmatrix}$, and show on a sketch. Make sure that you letter the points

$$\begin{pmatrix} 2 & 0 \\ 0 & 3 \end{pmatrix} \begin{pmatrix} 1 & 0 & 1 \\ 0 & 1 & 1 \end{pmatrix} = \begin{pmatrix} 2 & 0 & 2 \\ 0 & 3 & 3 \end{pmatrix}$$

From sketch we can see that the transformation is a two-way stretch, of factor 2 parallel to the x -axis and of factor 3 parallel to the y -axis.



Finding the matrix of a given transformation.

Example: Find the matrix for a shear with factor 2 and invariant line the x -axis.

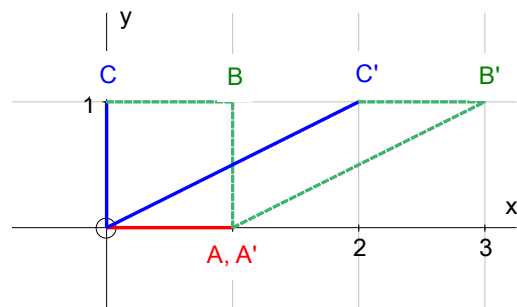
Solution: Each point is moved in the x -direction by a distance of $(2 \times \text{its } y\text{-coordinate})$.

$\underline{i} = \begin{pmatrix} 1 \\ 0 \end{pmatrix} \rightarrow \begin{pmatrix} 1 \\ 0 \end{pmatrix}$ (does not move as it is on the invariant line).

This will be the first column of the matrix $\begin{pmatrix} 1 & * \\ 0 & * \end{pmatrix}$

$\underline{j} = \begin{pmatrix} 0 \\ 1 \end{pmatrix} \rightarrow \begin{pmatrix} 2 \\ 1 \end{pmatrix}$. This will be the second column of the matrix $\begin{pmatrix} * & 2 \\ * & 1 \end{pmatrix}$

\Rightarrow Matrix of the shear is $\begin{pmatrix} 1 & 2 \\ 0 & 1 \end{pmatrix}$.

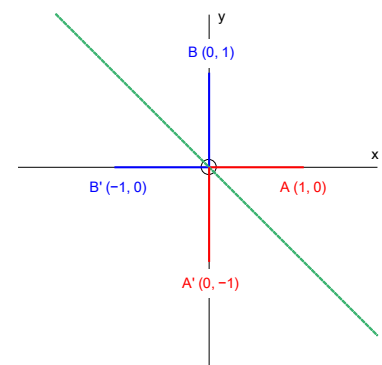


Example: Find the matrix for a reflection in $y = -x$.

Solution: First find the images of \underline{i} and \underline{j} . These will be the two columns of the matrix.

$A \rightarrow A' \Rightarrow \underline{i} = \begin{pmatrix} 1 \\ 0 \end{pmatrix} \rightarrow \begin{pmatrix} 0 \\ -1 \end{pmatrix}$.

This will be the first column of the matrix $\begin{pmatrix} 0 & * \\ -1 & * \end{pmatrix}$



$$B \rightarrow B' \Rightarrow \mathbf{i} = \begin{pmatrix} 0 \\ 1 \end{pmatrix} \rightarrow \begin{pmatrix} -1 \\ 0 \end{pmatrix}.$$

This will be the second column of the matrix $\begin{pmatrix} * & -1 \\ * & 0 \end{pmatrix}$

$$\Rightarrow \text{Matrix of the reflection is } \begin{pmatrix} 0 & -1 \\ -1 & 0 \end{pmatrix}.$$

Rotation matrix

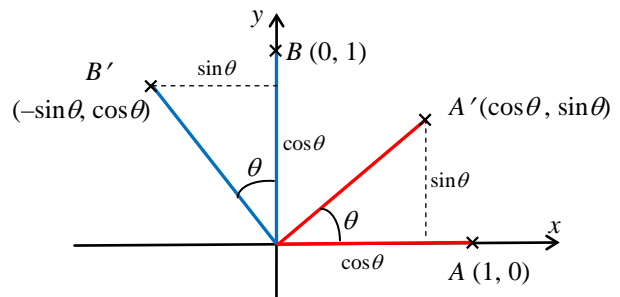
From the diagram we can see that

$$\mathbf{i} = \begin{pmatrix} 1 \\ 0 \end{pmatrix} \rightarrow \begin{pmatrix} \cos \theta \\ \sin \theta \end{pmatrix},$$

$$\mathbf{j} = \begin{pmatrix} 0 \\ 1 \end{pmatrix} \rightarrow \begin{pmatrix} -\sin \theta \\ \cos \theta \end{pmatrix}$$

These will be the first and second columns of the matrix

$$\Rightarrow \text{matrix is } R_\theta = \begin{pmatrix} \cos \theta & -\sin \theta \\ \sin \theta & \cos \theta \end{pmatrix}.$$



Determinant and area factor

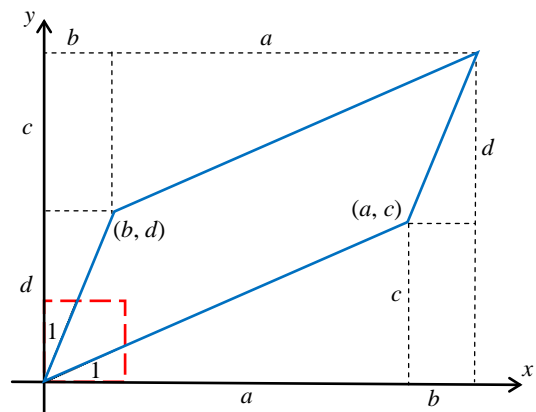
For the matrix $A = \begin{pmatrix} a & b \\ c & d \end{pmatrix}$

$$\begin{pmatrix} a & b \\ c & d \end{pmatrix} \begin{pmatrix} 1 \\ 0 \end{pmatrix} = \begin{pmatrix} a \\ c \end{pmatrix}$$

$$\text{and } \begin{pmatrix} a & b \\ c & d \end{pmatrix} \begin{pmatrix} 0 \\ 1 \end{pmatrix} = \begin{pmatrix} b \\ d \end{pmatrix}$$

\Rightarrow the unit square is mapped on to the parallelogram as shown in the diagram.

The area of the unit square = 1.



The area of the parallelogram = $(a+b)(c+d) - 2 \times (bc + \frac{1}{2}ac + \frac{1}{2}bd)$

$$= ac + ad + bc + bd - 2bc - ac - bd$$

$$= ad - bc = \det A.$$

All squares of the grid are mapped onto congruent parallelograms

\Rightarrow area factor of the transformation is $\det A = ad - bc$.

5 Series

You need to know the following sums

$$\sum_{r=1}^n r = 1 + 2 + 3 + \dots + n = \frac{1}{2}n(n+1)$$

$$\sum_{r=1}^n r^2 = 1^2 + 2^2 + 3^2 + \dots + n^2 = \frac{1}{6}n(n+1)(2n+1)$$

$$\sum_{r=1}^n r^3 = 1^3 + 2^3 + 3^3 + \dots + n^3 = \frac{1}{4}n^2(n+1)^2$$

$$= \left(\frac{1}{2}n(n+1)\right)^2 = \left(\sum_{r=1}^n r\right)^2$$

a fluke, but it helps to remember it

Example: Find $\sum_{r=1}^n r(r^2 - 3)$.

$$\begin{aligned} \text{Solution: } \sum_{r=1}^n r(r^2 - 3) &= \sum_{r=1}^n r^3 - 3 \sum_{r=1}^n r \\ &= \frac{1}{4}n^2(n+1)^2 - 3 \times \frac{1}{2}n(n+1) \\ &= \frac{1}{4}n(n+1)\{n(n+1) - 6\} \\ &= \frac{1}{4}n(n+1)(n+3)(n-2) \end{aligned}$$

Example: Find $S_n = 2^2 + 4^2 + 6^2 + \dots + (2n)^2$.

$$\begin{aligned} \text{Solution: } S_n &= 2^2 + 4^2 + 6^2 + \dots + (2n)^2 = 2^2(1^2 + 2^2 + 3^2 + \dots + n^2) \\ &= 4 \times \frac{1}{6}n(n+1)(2n+1) = \frac{2}{3}n(n+1)(2n+1) . \end{aligned}$$

Example: Find $\sum_{r=5}^{n+2} r^2$

$$\text{Solution: } \sum_{r=5}^{n+2} r^2 = \sum_{r=1}^{n+2} r^2 - \sum_{r=1}^4 r^2$$

notice that the top limit is 4 **not** 5

$$\begin{aligned} &= \frac{1}{6}(n+2)(n+2+1)(2(n+2)+1) - \frac{1}{6} \times 4 \times 5 \times 9 \\ &= \frac{1}{6}(n+2)(n+3)(2n+5) - 30. \end{aligned}$$

6 Proof by induction

1. Show that the result/formula is true for $n = 1$ (and sometimes $n = 2, 3 \dots$).

Conclude

“therefore the result/formula is true for $n = 1$ ”.

2. Make induction assumption

“Assume that the result/formula is true for $n = k$ ”.

Show that the result/formula must then be true for $n = k + 1$

Conclude

“therefore the result/formula is true for $n = k + 1$ ”.

3. Final conclusion

“therefore the result/formula is true for all positive integers, n , by mathematical induction”.

Summation

Example: Use mathematical induction to prove that

$$S_n = 1^2 + 2^2 + 3^2 + \dots + n^2 = \frac{1}{6}n(n+1)(2n+1)$$

Solution: When $n = 1$, $S_1 = 1^2 = 1$ and $S_1 = \frac{1}{6} \times 1(1+1)(2 \times 1 + 1) = \frac{1}{6} \times 1 \times 2 \times 3 = 1$

$\Rightarrow S_n = \frac{1}{6}n(n+1)(2n+1)$ is true for $n = 1$.

Assume that the formula is true for $n = k$

$$\Rightarrow S_k = 1^2 + 2^2 + 3^2 + \dots + k^2 = \frac{1}{6}k(k+1)(2k+1)$$

$$\begin{aligned}\Rightarrow S_{k+1} &= 1^2 + 2^2 + 3^2 + \dots + k^2 + (k+1)^2 = \frac{1}{6}k(k+1)(2k+1) + (k+1)^2 \\ &= \frac{1}{6}(k+1)\{k(2k+1) + 6(k+1)\} \\ &= \frac{1}{6}(k+1)\{2k^2 + 7k + 6\} = \frac{1}{6}(k+1)(k+2)(2k+3) \\ &= \frac{1}{6}(k+1)\{(k+1) + 1\}\{2(k+1) + 1\}\end{aligned}$$

\Rightarrow The formula is true for $n = k + 1$

$\Rightarrow S_n = \frac{1}{6}n(n+1)(2n+1)$ is true for all positive integers, n , by mathematical induction.

Recurrence relations

Example: A sequence, 4, 9, 19, 39, ... is defined by the recurrence relation

$$u_1 = 4, \quad u_{n+1} = 2u_n + 1. \quad \text{Prove that } u_n = 5 \times 2^{n-1} - 1.$$

Solution: When $n = 1$, $u_1 = 4$, and $u_1 = 5 \times 2^{1-1} - 1 = 5 - 1 = 4$, \Rightarrow formula true for $n = 1$.

Assume that the formula is true for $n = k$, $\Rightarrow u_k = 5 \times 2^{k-1} - 1$.

From the recurrence relation,

$$u_{k+1} = 2u_k + 1 = 2(5 \times 2^{k-1} - 1) + 1$$

$$\Rightarrow u_{k+1} = 5 \times 2^k - 2 + 1 = 5 \times 2^{(k+1)-1} - 1$$

\Rightarrow the formula is true for $n = k + 1$

\Rightarrow the formula is true for all positive integers, n , by mathematical induction.

Divisibility problems

Considering $f(k+1) - f(k)$, will lead to a proof which sometimes has hidden difficulties,

and a more reliable way is to consider $f(k+1) - m \times f(k)$, where m is chosen to eliminate the exponential term.

Example: Prove that $f(n) = 5^n - 4n - 1$ is divisible by 16 for all positive integers, n .

Solution: When $n = 1$, $f(1) = 5^1 - 4 - 1 = 0$, which is divisible by 16, and so $f(n)$ is divisible by 16 when $n = 1$.

Assume that the result is true for $n = k$, $\Rightarrow f(k) = 5^k - 4k - 1$ is divisible by 16.

Considering $f(k+1) - 5 \times f(k)$ we will eliminate the 5^k term.

$$\begin{aligned} f(k+1) - 5 \times f(k) &= (5^{k+1} - 4(k+1) - 1) - 5 \times (5^k - 4k - 1) \\ &= 5^{k+1} - 4k - 4 - 1 - 5^{k+1} + 20k + 5 = 16k \end{aligned}$$

$$\Rightarrow f(k+1) = 5 \times f(k) + 16k$$

Since $f(k)$ is divisible by 16 (induction assumption), and $16k$ is divisible by 16, then $f(k+1)$ must be divisible by 16,

$$\Rightarrow f(n) = 5^n - 4n - 1 \text{ is divisible by 16 for } n = k + 1$$

$\Rightarrow f(n) = 5^n - 4n - 1$ is divisible by 16 for all positive integers, n , by mathematical induction.

Example: Prove that $f(n) = 2^{2n+3} + 3^{2n-1}$ is divisible by 5 for all positive integers n .

Solution: When $n = 1$, $f(1) = 2^{2+3} + 3^{2-1} = 32 + 3 = 35 = 5 \times 7$, and so the result is true for $n = 1$.

Assume that the result is true for $n = k$

$\Rightarrow f(k) = 2^{2k+3} + 3^{2k-1}$ is divisible by 5

We could consider either (it does not matter which)

$f(k+1) - 2^2 \times f(k)$, which would eliminate the 2^{2k+3} term **I**

or $f(k+1) - 3^2 \times f(k)$, which would eliminate the 3^{2k-1} term **II**

$$\begin{aligned} \mathbf{I} \Rightarrow f(k+1) - 2^2 \times f(k) &= 2^{2(k+1)+3} + 3^{2(k+1)-1} - 2^2 \times (2^{2k+3} + 3^{2k-1}) \\ &= 2^{2k+5} + 3^{2k+1} - 2^{2k+5} - 2^2 \times 3^{2k-1} \end{aligned}$$

$$\Rightarrow f(k+1) - 4 \times f(k) = 9 \times 3^{2k-1} - 4 \times 3^{2k-1} = 5 \times 3^{2k-1}$$

$$\Rightarrow f(k+1) = 4 \times f(k) + 5 \times 3^{2k-1}$$

Since $f(k)$ is divisible by 5 (induction assumption), and $5 \times 3^{2k-1}$ is divisible by 5, then $f(k+1)$ must be divisible by 5.

$\Rightarrow f(n) = 2^{2n+3} + 3^{2n-1}$ is divisible by 5 for all positive integers, n , by mathematical induction.

Powers of matrices

Example: If $M = \begin{pmatrix} 2 & -1 \\ 0 & 1 \end{pmatrix}$, prove that $M^n = \begin{pmatrix} 2^n & 1 - 2^n \\ 0 & 1 \end{pmatrix}$ for all positive integers n .

Solution: When $n = 1$, $M^1 = \begin{pmatrix} 2^1 & 1 - 2^1 \\ 0 & 1 \end{pmatrix} = \begin{pmatrix} 2 & -1 \\ 0 & 1 \end{pmatrix} = M$

\Rightarrow the formula is true for $n = 1$.

Assume the formula is true for $n = k \Rightarrow M^k = \begin{pmatrix} 2^k & 1 - 2^k \\ 0 & 1 \end{pmatrix}$.

$$M^{k+1} = MM^k = \begin{pmatrix} 2 & -1 \\ 0 & 1 \end{pmatrix} \begin{pmatrix} 2^k & 1 - 2^k \\ 0 & 1 \end{pmatrix} = \begin{pmatrix} 2 \times 2^k & 2 - 2 \times 2^k - 1 \\ 0 & 1 \end{pmatrix}$$

$$\Rightarrow M^{k+1} = \begin{pmatrix} 2^{k+1} & 1 - 2^{k+1} \\ 0 & 1 \end{pmatrix} \Rightarrow \text{The formula is true for } n = k + 1$$

$\Rightarrow M^n = \begin{pmatrix} 2^n & 1 - 2^n \\ 0 & 1 \end{pmatrix}$ is true for all positive integers, n , by mathematical induction.

7 Appendix

Complex roots of a real polynomial equation

Preliminary results:

$$\mathbf{I} \quad (z_1 + z_2 + z_3 + z_4 + \dots + z_n)^* = z_1^* + z_2^* + z_3^* + z_4^* + \dots + z_n^*,$$

by repeated application of $(z + w)^* = z^* + w^*$

$$\mathbf{II} \quad (z^n)^* = (z^*)^n$$

$$(zw)^* = z^*w^*$$

$$\Rightarrow (z^n)^* = (z^{n-1}z)^* = (z^{n-1})^*(z)^* = (z^{n-2}z)^*(z)^* = (z^{n-2})^*(z)^*(z)^* \dots = (z^*)^n$$

Theorem: If $z = a + bi$ is a root of $\alpha_n z^n + \alpha_{n-1} z^{n-1} + \alpha_{n-2} z^{n-2} + \dots + \alpha_2 z^2 + \alpha_1 z + \alpha_0 = 0$,
and if all the α_i are real,
then the conjugate, $z^* = a - bi$ is also a root.

Proof: If $z = a + bi$ is a root of the equation $\alpha_n z^n + \alpha_{n-1} z^{n-1} + \dots + \alpha_1 z + \alpha_0 = 0$

$$\text{then } \alpha_n z^n + \alpha_{n-1} z^{n-1} + \dots + \alpha_2 z^2 + \alpha_1 z + \alpha_0 = 0$$

$$\Rightarrow (\alpha_n z^n + \alpha_{n-1} z^{n-1} + \dots + \alpha_2 z^2 + \alpha_1 z + \alpha_0)^* = 0 \quad \text{since } 0^* = 0$$

$$\Rightarrow (\alpha_n z^n)^* + (\alpha_{n-1} z^{n-1})^* + \dots + (\alpha_2 z^2)^* + (\alpha_1 z)^* + (\alpha_0)^* = 0 \quad \text{using } \mathbf{I}$$

$$\Rightarrow \alpha_n^* (z^n)^* + \alpha_{n-1}^* (z^{n-1})^* + \dots + \alpha_2^* (z^2)^* + \alpha_1^* (z)^* + \alpha_0^* = 0 \quad \text{since } (zw)^* = z^*w^*$$

$$\Rightarrow \alpha_n (z^n)^* + \alpha_{n-1} (z^{n-1})^* + \dots + \alpha_2 (z^2)^* + \alpha_1 (z)^* + \alpha_0 = 0 \quad \alpha_i \text{ real} \Rightarrow \alpha_i^* = \alpha_i$$

$$\Rightarrow \alpha_n (z^*)^n + \alpha_{n-1} (z^*)^{n-1} + \dots + \alpha_2 (z^*)^2 + \alpha_1 (z^*) + \alpha_0 = 0 \quad \text{using } \mathbf{II}$$

$$\Rightarrow z^* = a - bi \text{ is also a root of the equation.}$$

Formal definition of a linear transformation

A linear transformation T has the following properties:

$$(i) \quad T \begin{pmatrix} kx \\ ky \end{pmatrix} = kT \begin{pmatrix} x \\ y \end{pmatrix}$$

$$(ii) \quad T \left(\begin{pmatrix} x_1 \\ y_1 \end{pmatrix} + \begin{pmatrix} x_2 \\ y_2 \end{pmatrix} \right) = T \begin{pmatrix} x_1 \\ y_1 \end{pmatrix} + T \begin{pmatrix} x_2 \\ y_2 \end{pmatrix}$$

It can be shown that **any** matrix transformation is a linear transformation, and that **any** linear transformation can be represented by a matrix.

Derivative of x^n , for any integer

We can use proof by induction to show that $\frac{d}{dx}(x^n) = nx^{n-1}$, for any integer n .

1) We know that the derivative of x^0 is 0 which equals $0x^{-1}$,

since $x^0 = 1$, and the derivative of 1 is 0

$$\Rightarrow \frac{d}{dx}(x^n) = nx^{n-1} \text{ is true for } n = 0.$$

2) We know that the derivative of x^1 is 1 which equals $1 \times x^{1-1}$

$$\Rightarrow \frac{d}{dx}(x^n) = nx^{n-1} \text{ is true for } n = 1$$

Assume that the result is true for $n = k$

$$\Rightarrow \frac{d}{dx}(x^k) = kx^{k-1}$$

$$\Rightarrow \frac{d}{dx}(x^{k+1}) = \frac{d}{dx}(x \times x^k) = x \times \frac{d}{dx}(x^k) + 1 \times x^k \quad \text{product rule}$$

$$\Rightarrow \frac{d}{dx}(x^{k+1}) = x \times kx^{k-1} + x^k = kx^k + x^k = (k+1)x^k$$

$$\Rightarrow \frac{d}{dx}(x^n) = nx^{n-1} \text{ is true for } n = k + 1$$

$$\Rightarrow \frac{d}{dx}(x^n) = nx^{n-1} \text{ is true for all positive integers, } n, \text{ by mathematical induction.}$$

3) We know that the derivative of x^{-1} is $-x^{-2}$ which equals $-1 \times x^{-1-1}$

$$\Rightarrow \frac{d}{dx}(x^n) = nx^{n-1} \text{ is true for } n = -1$$

Assume that the result is true for $n = k$

$$\Rightarrow \frac{d}{dx}(x^k) = kx^{k-1}$$

$$\Rightarrow \frac{d}{dx}(x^{k-1}) = \frac{d}{dx}\left(\frac{x^k}{x}\right) = \frac{x \times \frac{d}{dx}(x^k) - x^k \times 1}{x^2} \quad \text{quotient rule}$$

$$\Rightarrow \frac{d}{dx}(x^{k-1}) = \frac{x \times kx^{k-1} - x^k}{x^2} = \frac{(k-1)x^k}{x^2} = (k-1)x^{k-2} = (k-1)x^{(k-1)-1}$$

$$\Rightarrow \frac{d}{dx}(x^n) = nx^{n-1} \text{ is true for } n = k - 1$$

We are going backwards (**from** $n = k$ **to** $n = k - 1$), and, since we started from $n = -1$,

$$\Rightarrow \frac{d}{dx}(x^n) = nx^{n-1} \text{ is true for all negative integers, } n, \text{ by mathematical induction.}$$

Putting 1), 2) and 3), we have proved that

$$\frac{d}{dx}(x^n) = nx^{n-1}, \text{ for any integer } n.$$

8 Index

Complex numbers

- Argand diagram, 4
- argument, 5
- arithmetical operations, 3
- complex conjugate, 3
- complex number plane, 4
- definitions, 3
- equality, 6
- modulus, 5
- multiplication by i , 5
- polynomial equations, 6
- similarity with vectors, 4
- square roots, 6

Complex roots of a real polynomial equation, 22

Derivative of x^n , for any integer, 23

Determinant

- area factor, 17

Linear transformation

- formal definition, 22

Matrices

- determinant, 14
- identity matrix, 14
- inverse matrix, 14
- non-singular, 15
- order, 14
- singular, 15

Matrix transformations

- area factor, 17
- basis vectors, 15
- finding matrix for, 16
- geometric effect, 16
- rotation matrix, 17

Numerical solutions of equations

- accuracy of solution, 8
- interval bisection, 8
- linear interpolation, 9
- Newton Raphson method, 10

Parabolas

- directrix, 11
- focus, 11
- gradient - parametric form, 11
- normal - parametric form, 12
- parametric form, 11
- tangent - parametric form, 12

Proof by induction

- divisibility problems, 20
- general principles, 19
- powers of matrices, 21
- recurrence relations, 20
- summation, 19

Rectangular hyperbolas

- gradient - parametric form, 13
- parametric form, 13
- tangent - parametric form, 13

Series

- standard summation formulae, 18

Transformations

- area factor, 17
- basis vectors, 15
- finding matrix for, 16
- geometric effect, 16
- linear transformations, 15
- matrices, 16
- rotation matrix, 17